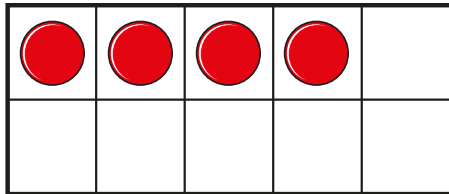


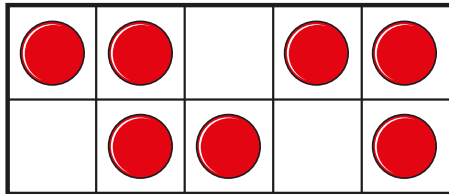


Count one more

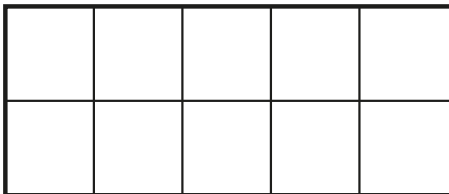
- 1 a) Draw one more than 4



- b) Draw one more than 7



- c) Draw one more than 5



- 2 a) Circle one more than 6

1	2	3	4	5	6	7	8
---	---	---	---	---	---	---	---

- b) Circle one more than 1

1	2	3	4	5	6	7	8
---	---	---	---	---	---	---	---

3 Write the missing numbers.

a) One more than 3 is

b) One more than seven is

c) One more than 9 is

d) One more than 0 is

4 Write the missing numbers.

a) One more than is 5

b) One more than is nine.

c) One more than is 1

5 Colour the number that is one more than 6

10	9	8	7	6	5	4	3	2	1
----	---	---	---	---	---	---	---	---	---

