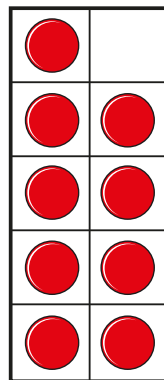
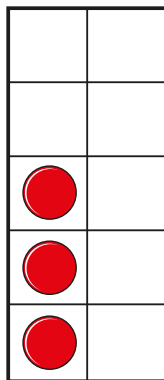
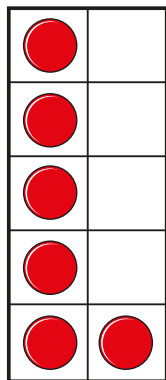


# Order numbers

1 a) What are the numbers?



b) Write the numbers in order.

Start with the smallest number.

smallest

greatest

2 Circle the numbers that are in order from greatest to smallest.

1, 4, 5

5, 4, 1



**3** Write the numbers in order.

Start with the smallest number.

a)	9	4	1	<input type="text"/>	<input type="text"/>	<input type="text"/>
b)	5	0	6	<input type="text"/>	<input type="text"/>	<input type="text"/>
c)	5	8	2	<input type="text"/>	<input type="text"/>	<input type="text"/>

**4** Write the numbers in order.

Start with the smallest number.

a)	seven	five	six
<hr/>			
b)	zero	eight	three
<hr/>			

**5** Write the numbers in order.

Start with the smallest number.

	3	8	1	5
<input type="text"/>	<input type="text"/>	<input type="text"/>	<input type="text"/>	<input type="text"/>

